

SUNSHINE MATH - 2
Earth, X

Name: _____
(This shows my own thinking.)

- ★ 1. Vilma turned 16 years old in 1995. In what year was she born?

Answer: _____

- ★★ 2. Find a number greater than 6,285 and less than 6,582. Use these numbers.

2 5 8 6

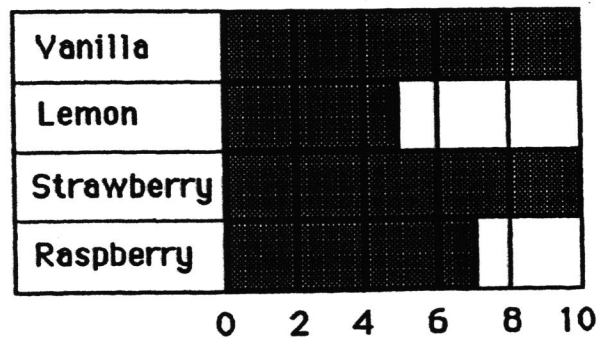
Answer: The number is _____

- ★★ 3. Look at the graph. Answer both questions.

a. How many like raspberry?

b. How many like either lemon or strawberry?

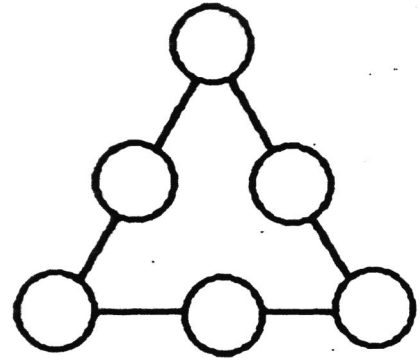
Yogurt Second Graders Like



- ★★★ 4. I am thinking of two numbers that add to twenty-one. One number is 3 more than the other. What are my numbers?

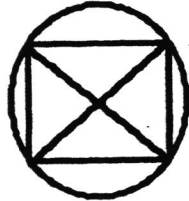
Answer: _____ and _____

- ★★ 5. Place 1, 2, 3, 4, 5, and 6 in the circles so each side of the triangle has the sum of 11.




- ★★ 6. Which one of these shapes can be drawn without lifting your pencil or going over the same line twice? Circle it.

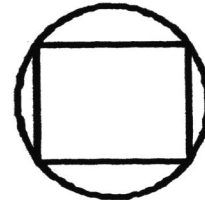
a.



b.




c.



- ★★★★ 7. How much does the ball weigh?

Answer: ___ grams



- ★★★★ 8. Henrique pressed the keys $\boxed{5}$, $\boxed{=}$, $\boxed{1}$, $\boxed{8}$, and $\boxed{+}$ on his calculator, but not in that order. He got the answer 23. What problem did he do?

Henrique's Problem:

