

SUNSHINE MATH - 1
Venus, I

Name: _____


(This shows my own thinking.)

★★ 1. Sasha needs



She has .

How many more must she get?

Answer: _____ 

★ 2. Five little  flying high.

Seven more come to sit nearby.

How many  in all?

Answer: _____  in all

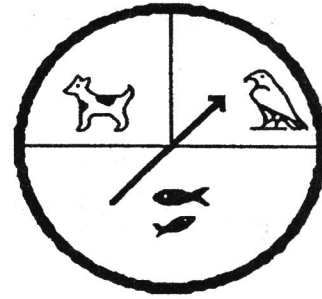
★★★ 3. Amanda reads 2 books a week.

How many books does she read
in 6 weeks?

Answer: _____ books





- ★★ 4. Julio will use the spinner to find out what pet his parents will buy. Which pet will he probably get?



Circle the answer.

dog bird fish

- ★★ 5. Make a graph to show the birthdays. Draw a  for each child.

September: 

October: 

November: 

Fall Birthdays

September							
October							
November							

- ★ 6. Draw the picture that comes next:

